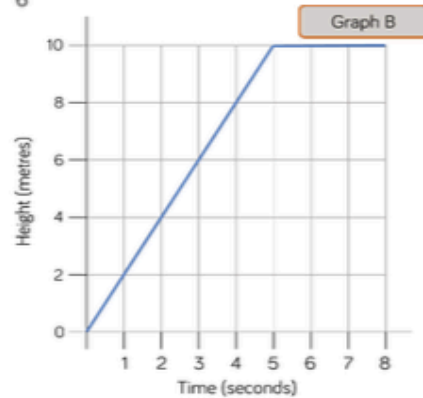
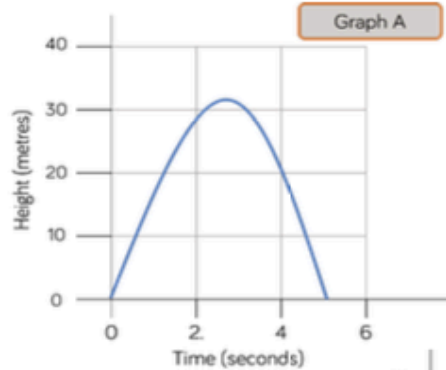


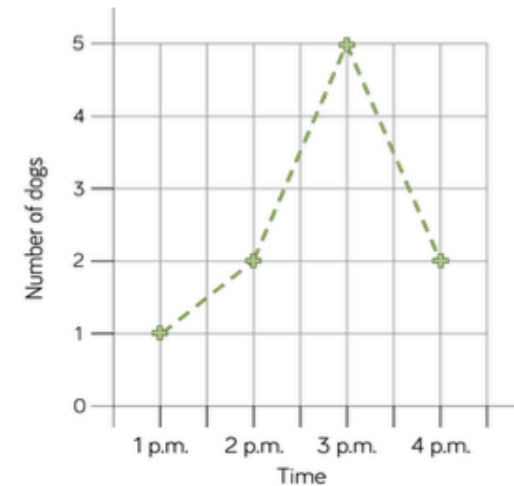
Jack launched a toy rocket into the sky. After 5 seconds the rocket fell to the ground.

Which graph shows this?
Explain how you know.



Make up your own story for the other graph.

Tommy created a line graph to show the number of dogs walking in the park one afternoon.



Tommy says,



At half past one there are 1.5 dogs in the park.

Why is Tommy incorrect?

What would be a better way of presenting this data?