



# Comparing Daylight Hours in Antarctica

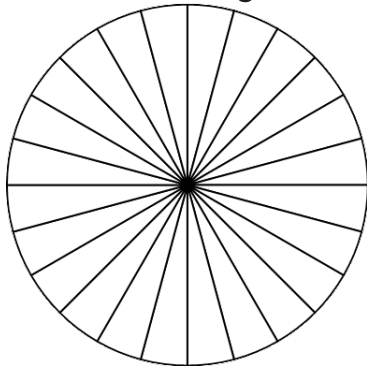


Shade each pie chart to show the average number of hours per day of daylight, twilight and darkness in each month. Then write a sentence for each month, describing what each place would be like at 1pm.

## Daylight, Twilight and Darkness Hours in Antarctica

	January	April	July	October
Daylight	21	3	0	20
Twilight	3	13	4	4
Darkness	0	8	20	0

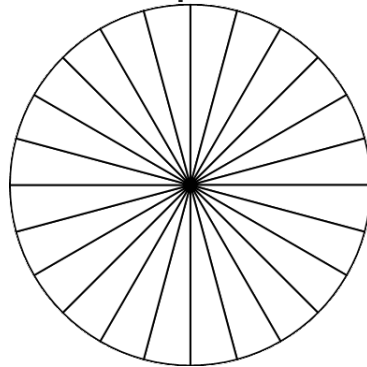
January



At 1pm in the UK, it would be...

At 1pm in Antarctica, it would be...

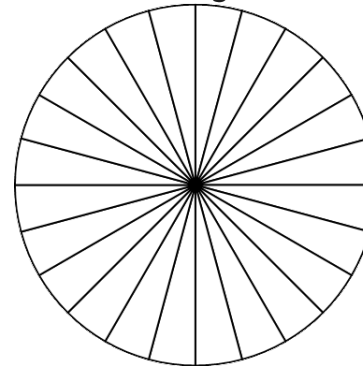
April



At 1pm in the UK, it would be...

At 1pm in Antarctica, it would be...

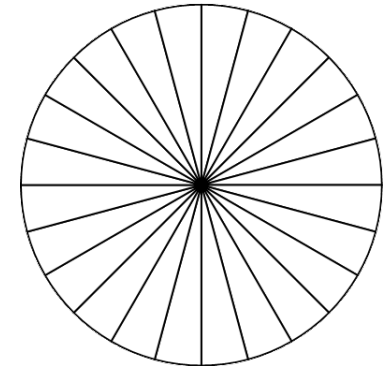
July



At 1pm in the UK, it would be...

At 1pm in Antarctica, it would be...

October



At 1pm in the UK, it would be...

At 1pm in Antarctica, it would be...