



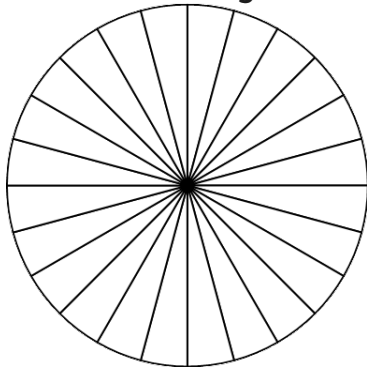
Comparing Daylight Hours in Antarctica **Answers**

Shade each pie chart to show the average number of hours per day of daylight, twilight and darkness in each month. Then write a sentence for each month, describing what each place would be like at 1pm.

Daylight, Twilight and Darkness Hours in Antarctica

	January	April	July	October
Daylight	21	3	0	20
Twilight	3	13	4	4
Darkness	0	8	20	0

January



21 portions should show daylight and 3 twilight.

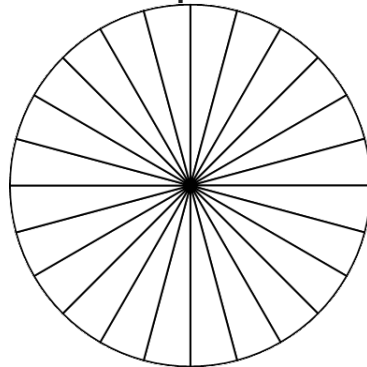
At 1pm in the UK, it would be...

daylight.

At 1pm in Antarctica, it would be...

daylight.

April



3 portions should show daylight, 13 twilight and 8 darkness.

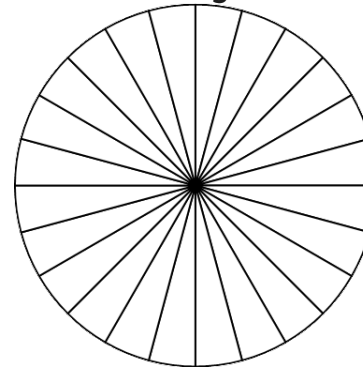
At 1pm in the UK, it would be...

daylight.

At 1pm in Antarctica, it would be...

twilight.

July



4 portions should show twilight and 20 darkness.

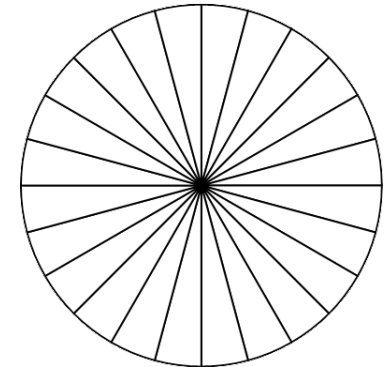
At 1pm in the UK, it would be...

daylight.

At 1pm in Antarctica, it would be...

in darkness.

October



20 portions should show daylight and 4 twilight.

At 1pm in the UK, it would be...

daylight.

At 1pm in Antarctica, it would be...

daylight.